



$$10 = 7 + 3$$




$$10 = 8 + 2$$




$$10 = 9 + 1$$



$$10 = 4 + 6$$




$$10 = 5 + 5$$




$$10 = 6 + 4$$



$$10 = 1 + 9$$





$$10 = 2 + 8$$




$$10 = 3 + 7$$

هذه هي مكونات
العدد ١٠







$11 = \dots + 5$




$11 = \dots + 4$




$11 = \dots + 3$




$11 = \dots + 2$




$11 = \dots + 1$




$11 = \dots + 10$




$11 = \dots + 9$



$11 = \dots + 8$



$11 = \dots + 7$



$11 = \dots + 6$



١٢

.... +



١٢

.... +



١٢

.... +



١٢

.... +




١٢

.... +




١٢

.... +




١٢

.... +




١٢

.... +




١٢

.... +



١٢

.... +



١٢

.... +

هيا نكتب مكونات
العددين ١٢ و ١١

